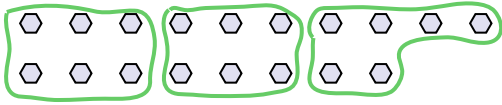


Use the shapes provided to answer the questions.

Answers

Ex) How many groups of 6 can you make with the 18 shapes below?

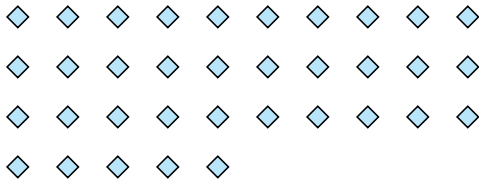


1) How many groups of 6 can you make with the 12 shapes below?



Ex. 3


2) How many groups of 7 can you make with the 35 shapes below?



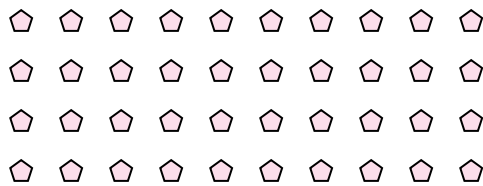
3) How many groups of 4 can you make with the 8 shapes below?




4) How many groups of 8 can you make with the 24 shapes below?



5) How many groups of 4 can you make with the 40 shapes below?




6) How many groups of 6 can you make with the 36 shapes below?




7) How many groups of 5 can you make with the 10 shapes below?



8) How many groups of 9 can you make with the 27 shapes below?



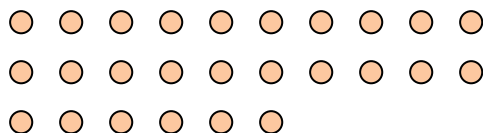
9) How many groups of 8 can you make with the 32 shapes below?



10) How many groups of 6 can you make with the 18 shapes below?



11) How many groups of 2 can you make with the 26 shapes below?



1. _____

2. _____

3. _____

4. _____

5.

6. _____

7.

8.

9.

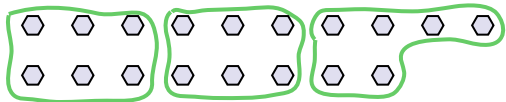
10.

11.



Use the shapes provided to answer the questions.


- Ex) How many groups of 6 can you make with the 18 shapes below?



- 1) How many groups of 6 can you make with the 12 shapes below?




- 2) How many groups of 7 can you make with the 35 shapes below?



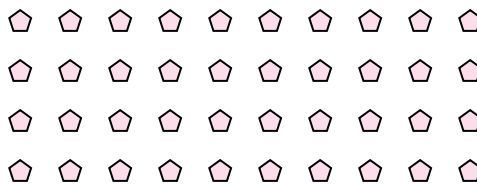
- 3) How many groups of 4 can you make with the 8 shapes below?




- 4) How many groups of 8 can you make with the 24 shapes below?



- 5) How many groups of 4 can you make with the 40 shapes below?



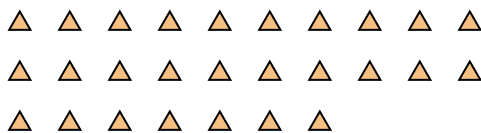
- 6) How many groups of 6 can you make with the 36 shapes below?



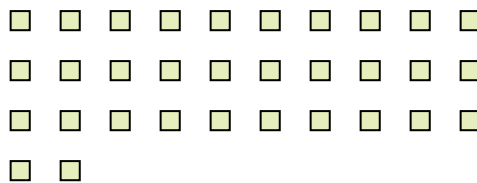
- 7) How many groups of 5 can you make with the 10 shapes below?



- 8) How many groups of 9 can you make with the 27 shapes below?



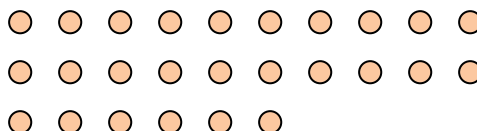
- 9) How many groups of 8 can you make with the 32 shapes below?



- 10) How many groups of 6 can you make with the 18 shapes below?



- 11) How many groups of 2 can you make with the 26 shapes below?

**Answers**Ex. 31. 22. 53. 24. 35. 106. 67. 28. 39. 410. 311. 13