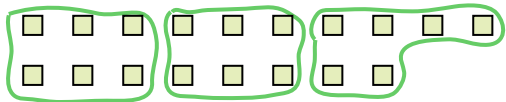



Use the shapes provided to answer the questions.


Ex) How many groups of 6 can you make with the 18 shapes below?




1) How many groups of 3 can you make with the 30 shapes below?



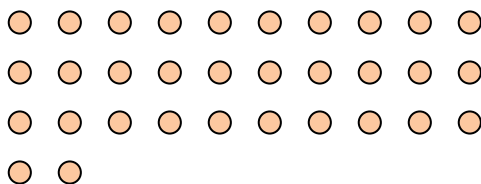
2) How many groups of 4 can you make with the 28 shapes below?



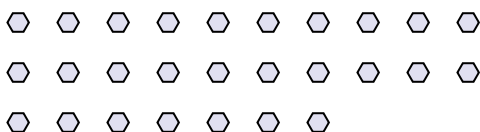
3) How many groups of 2 can you make with the 40 shapes below?



4) How many groups of 4 can you make with the 32 shapes below?




5) How many groups of 9 can you make with the 27 shapes below?




6) How many groups of 6 can you make with the 36 shapes below?



7) How many groups of 3 can you make with the 36 shapes below?



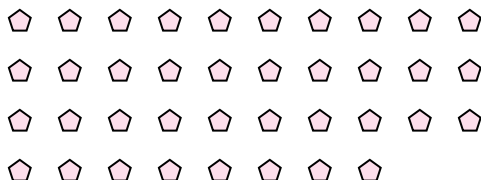
8) How many groups of 6 can you make with the 36 shapes below?



9) How many groups of 4 can you make with the 36 shapes below?



10) How many groups of 2 can you make with the 38 shapes below?



11) How many groups of 7 can you make with the 14 shapes below?



Answers

Ex. **3**

1. **10**

2. **7**

3. **20**

4. **8**

5. **3**

6. **6**

7. **12**

8. **6**

9. 9

10. **19**11. **2**