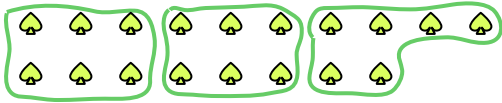




**Use the shapes provided to answer the questions.**


**Ex)** How many groups of 6 can you make with the 18 shapes below?



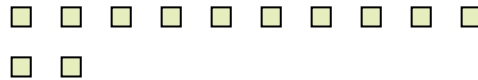
1) How many groups of 5 can you make with the 40 shapes below?




2) How many groups of 7 can you make with the 21 shapes below?



3) How many groups of 6 can you make with the 12 shapes below?



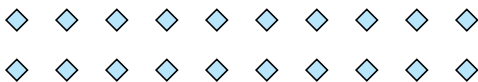
4) How many groups of 3 can you make with the 24 shapes below?



5) How many groups of 2 can you make with the 4 shapes below?




6) How many groups of 5 can you make with the 20 shapes below?



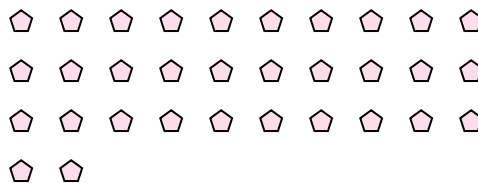
7) How many groups of 9 can you make with the 18 shapes below?



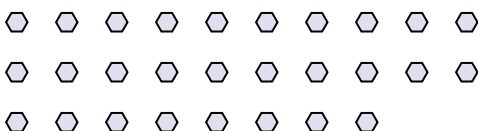
8) How many groups of 9 can you make with the 36 shapes below?



9) How many groups of 2 can you make with the 32 shapes below?



**10)** How many groups of 2 can you make with the 28 shapes below?



11) How many groups of 8 can you make with the 24 shapes below?



## Answers

Ex. 3

1. 8

2. 3

3. 2

4. **8**

5. **2**

6. **4**

7. **2**

8. **4**

9. **16**

10. **14**

11. **3**