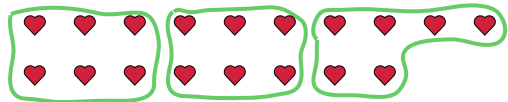




Use the shapes provided to answer the questions.

Answers

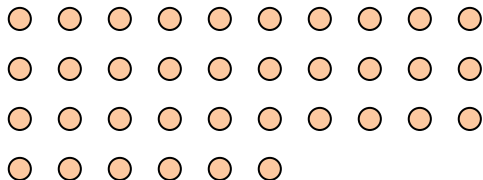
- Ex) How many groups of 6 can you make with the 18 shapes below?




- 1) How many groups of 2 can you make with the 26 shapes below?



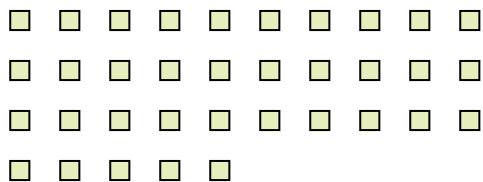
- 2) How many groups of 9 can you make with the 36 shapes below?



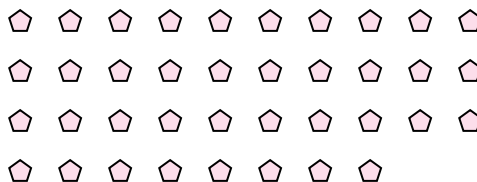
- 3) How many groups of 3 can you make with the 24 shapes below?



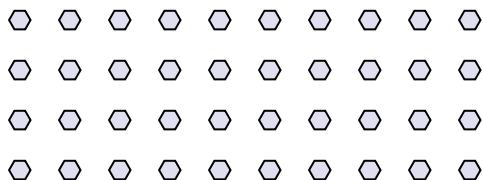
- 4) How many groups of 7 can you make with the 35 shapes below?




- 5) How many groups of 2 can you make with the 38 shapes below?



- 6) How many groups of 8 can you make with the 40 shapes below?



- 7) How many groups of 9 can you make with the 36 shapes below?



- 8) How many groups of 4 can you make with the 40 shapes below?




- 9) How many groups of 7 can you make with the 35 shapes below?



- 10) How many groups of 5 can you make with the 10 shapes below?



- 11) How many groups of 9 can you make with the 27 shapes below?

Ex. 3

1. _____

2. _____

3. _____

4. _____

5. _____

6. _____

7. _____

8. _____

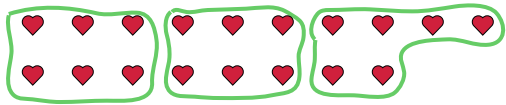
9. _____

10. _____

11. _____

Use the shapes provided to answer the questions.

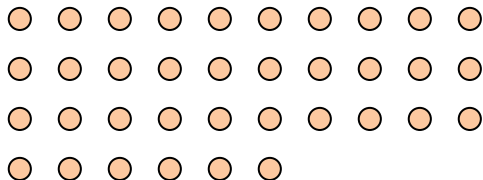
Ex) How many groups of 6 can you make with the 18 shapes below?




1) How many groups of 2 can you make with the 26 shapes below?



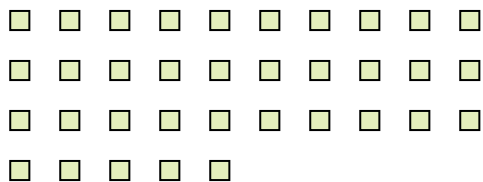
2) How many groups of 9 can you make with the 36 shapes below?



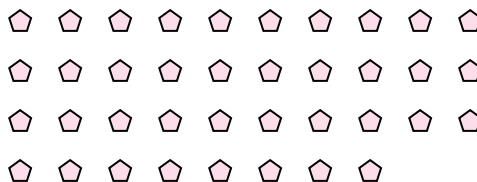
3) How many groups of 3 can you make with the 24 shapes below?



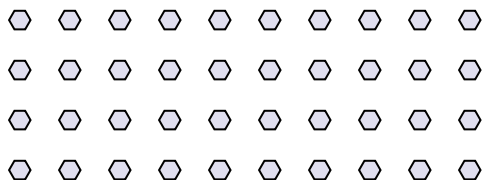
4) How many groups of 7 can you make with the 35 shapes below?




5) How many groups of 2 can you make with the 38 shapes below?



6) How many groups of 8 can you make with the 40 shapes below?



7) How many groups of 9 can you make with the 36 shapes below?



8) How many groups of 4 can you make with the 40 shapes below?




9) How many groups of 7 can you make with the 35 shapes below?



10) How many groups of 5 can you make with the 10 shapes below?



11) How many groups of 9 can you make with the 27 shapes below?



Answers

Ex. 3

1. 13

2. 4

3. 8

4. 5

5. **19**

6. 5

7. **4**

8. **10**

9. 5

10. 2

11. **3**