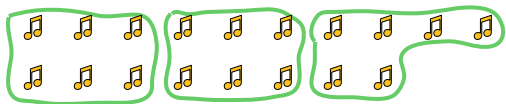
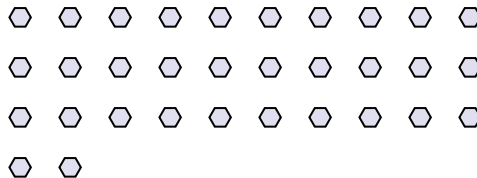


Use the shapes provided to answer the questions.

Ex) How many groups of 6 can you make with the 18 shapes below?




1) How many groups of 4 can you make with the 32 shapes below?



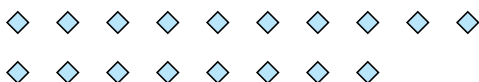
2) How many groups of 8 can you make with the 24 shapes below?



3) How many groups of 7 can you make with the 21 shapes below?



4) How many groups of 6 can you make with the 18 shapes below?



5) How many groups of 6 can you make with the 18 shapes below?



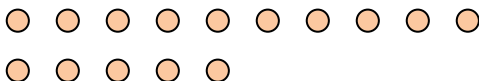
6) How many groups of 5 can you make with the 20 shapes below?



7) How many groups of 9 can you make with the 18 shapes below?



8) How many groups of 5 can you make with the 15 shapes below?



9) How many groups of 5 can you make with the 10 shapes below?



10) How many groups of 3 can you make with the 9 shapes below?



11) How many groups of 3 can you make with the 30 shapes below?



Answers

Ex. 3

1. _____

2.

3.

4.

5.

6.

7.

8.

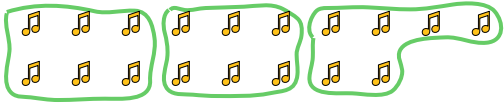
9.

10.

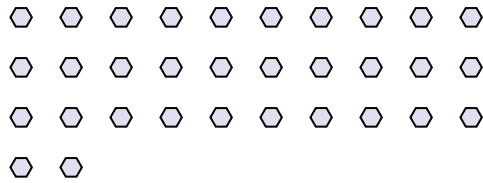
11.

Use the shapes provided to answer the questions.

Ex) How many groups of 6 can you make with the 18 shapes below?



1) How many groups of 4 can you make with the 32 shapes below?



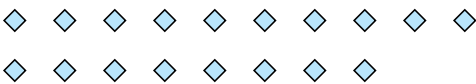
2) How many groups of 8 can you make with the 24 shapes below?



3) How many groups of 7 can you make with the 21 shapes below?



4) How many groups of 6 can you make with the 18 shapes below?



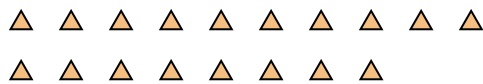
5) How many groups of 6 can you make with the 18 shapes below?



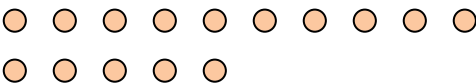
6) How many groups of 5 can you make with the 20 shapes below?



7) How many groups of 9 can you make with the 18 shapes below?



8) How many groups of 5 can you make with the 15 shapes below?



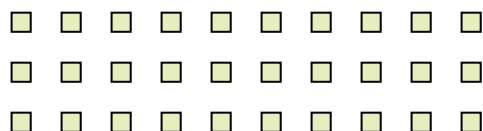
9) How many groups of 5 can you make with the 10 shapes below?



10) How many groups of 3 can you make with the 9 shapes below?



11) How many groups of 3 can you make with the 30 shapes below?



Answers

Ex. 3

1. 8

2. 3

3. 3

4. 3

5. 3

6. 4

7. 2

8. 3

9. 2

10. 3

11. 10